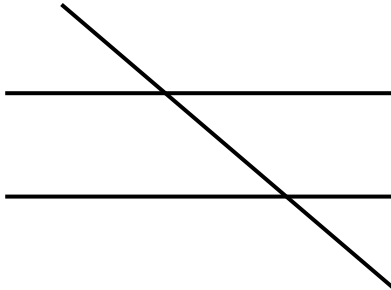


Count the number of acute, obtuse and right angles in each figure.

1)

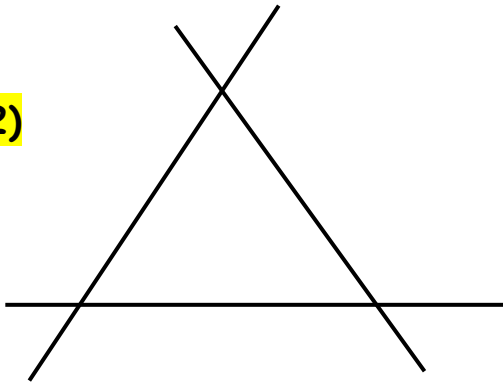


Acute angles = _____

Obtuse angles = _____

Right angles = _____

2)

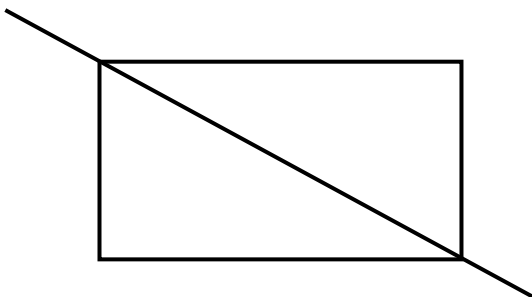


Acute angles = _____

Obtuse angles = _____

Right angles = _____

3)

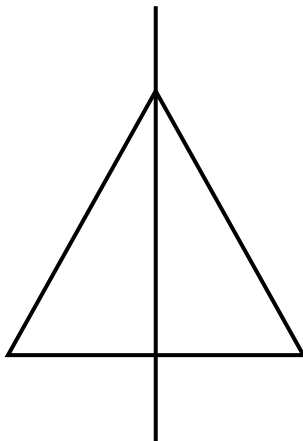


Acute angles = _____

Obtuse angles = _____

Right angles = _____

4)



Acute angles = _____

Obtuse angles = _____

Right angles = _____



ANSWERS

1) Acute = 4

Obtuse = 4

Right = 0

2) Acute = 6

Obtuse = 6

Right = 0

3) Acute = 4

Obtuse = 4

Right = 2

4) Acute = 4

Obtuse = 2

Right = 4