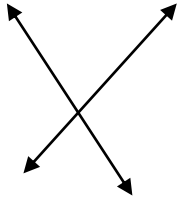


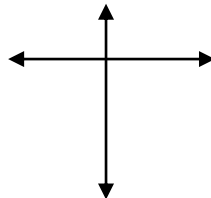
Write if each of the following pair of lines is **parallel**, **perpendicular** or **intersecting**.

1.



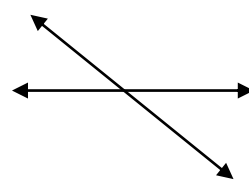
\_\_\_\_\_

2.



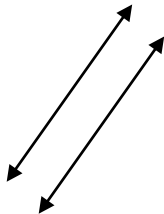
\_\_\_\_\_

3.



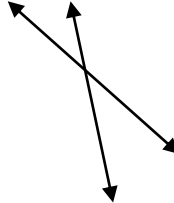
\_\_\_\_\_

4.



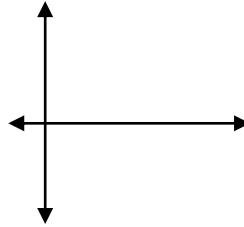
\_\_\_\_\_

5.



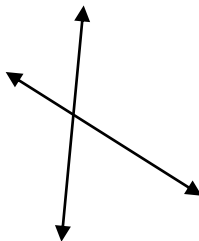
\_\_\_\_\_

6.




\_\_\_\_\_

7.



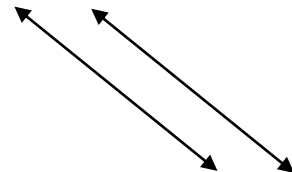
\_\_\_\_\_

8.



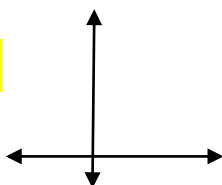
\_\_\_\_\_

9.



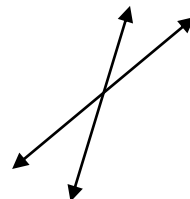
\_\_\_\_\_

10.



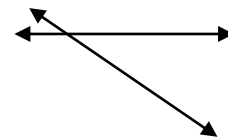
\_\_\_\_\_

11.



\_\_\_\_\_

12.



\_\_\_\_\_



## ANSWERS

1) Intersecting

2) Perpendicular

3) Intersecting

4) Parallel

5) Intersecting

6) Perpendicular

7) Intersecting

8) Parallel

9) Parallel

10) Perpendicular

11) Intersecting

12) Intersecting