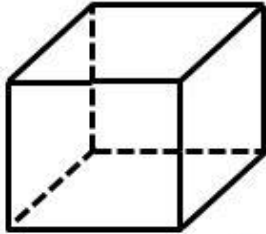
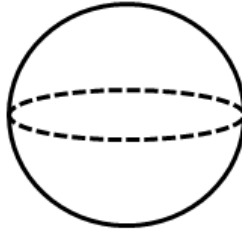


Write the names of the following 3D shapes.

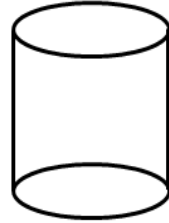
1)



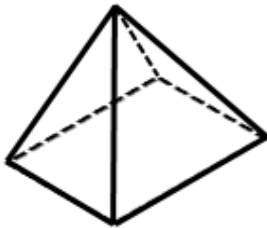
2)



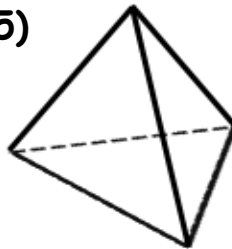
3)



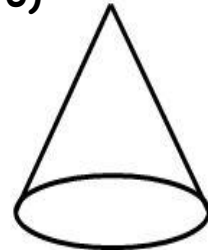
4)




5)



6)



7)



8)



**WORD BANK:** Cuboid      Triangular Prism      Sphere      Cube  
Pyramid      Cone      Tetrahedron      Cylinder



## ANSWERS

- 1) Cuboid
- 2) Sphere
- 3) Cylinder
- 4) Pyramid
- 5) Tetrahedron
- 6) Cone
- 7) Cuboid
- 8) Triangular Prism