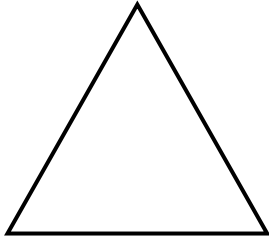


2D and 3D Shapes  
**WORKSHEET#5**

Name the following polygons.

1)



Name: \_\_\_\_\_ Sides: \_\_\_\_\_

2)



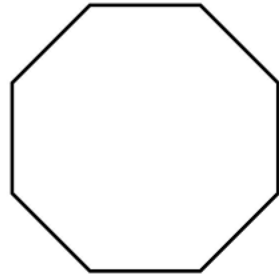
Name: \_\_\_\_\_ Sides: \_\_\_\_\_

3)



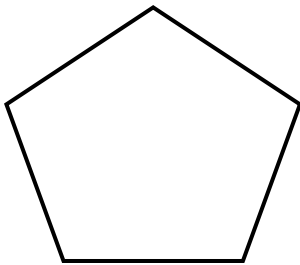
Name: \_\_\_\_\_ Sides: \_\_\_\_\_

4)



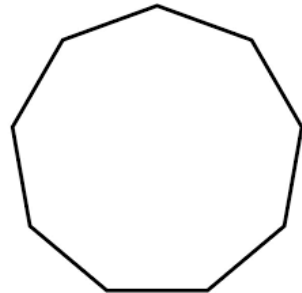
Name: \_\_\_\_\_ Sides: \_\_\_\_\_

5)



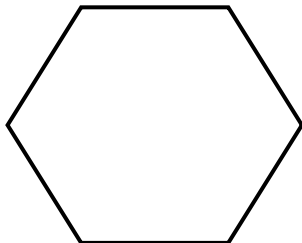
Name: \_\_\_\_\_ Sides: \_\_\_\_\_

6)



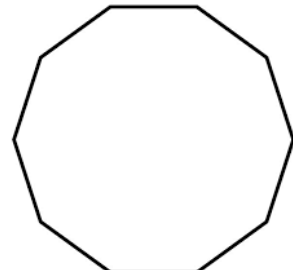
Name: \_\_\_\_\_ Sides: \_\_\_\_\_

7)



Name: \_\_\_\_\_ Sides: \_\_\_\_\_

8)



Name: \_\_\_\_\_ Sides: \_\_\_\_\_



## ANSWERS

- 1) Triangle - 3 sides
- 2) Square - 4 sides
- 3) Pentagon - 5 sides
- 4) Hexagon - 6 sides
- 5) Heptagon - 7 sides
- 6) Octagon - 8 sides
- 7) Nonagon - 9 sides
- 8) Decagon - 10 sides