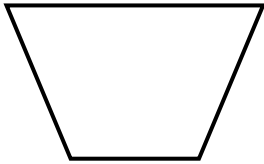


2D and 3D Shapes  
**WORKSHEET#3**

Name the following quadrilaterals.

Word Bank: Rhombus      Rectangle      Parallelogram  
Square      Rectangle      Kite      Trapezium

1)



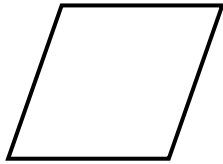
\_\_\_\_\_

2)



\_\_\_\_\_

3)



\_\_\_\_\_

4)



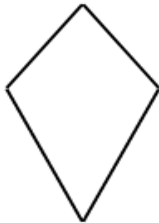
\_\_\_\_\_

5)



\_\_\_\_\_

6)



\_\_\_\_\_

Answer the following questions.

7) What is the difference between a rectangle and a parallelogram?

\_\_\_\_\_  
\_\_\_\_\_

8) What is the difference between a square and a rectangle?

\_\_\_\_\_  
\_\_\_\_\_

**ANSWERS**

1) Trapezium

2) Square

3) Rhombus

4) Rectangle

5) Parallelogram

6) Kite

7) Both have opposite equal sides but the difference between a rectangle and a parallelogram is that rectangle has all for right angles where as a parallelogram has no right angle.

8) A square has all 4 sides equal whereas in a rectangle, opposite sides are equal or it has 2 pairs of equal sides.