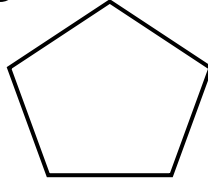


Name the following 2D shapes.

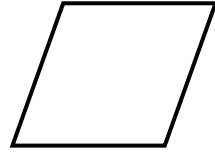
1)



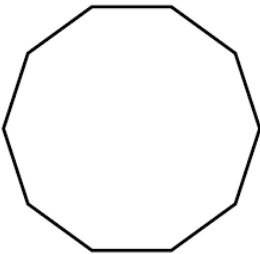
2)



3)



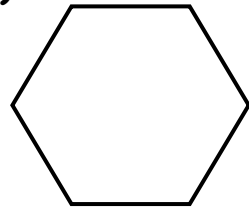
4)



5)



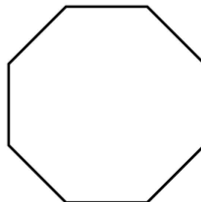
6)



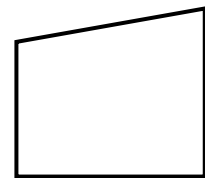
7)



8)



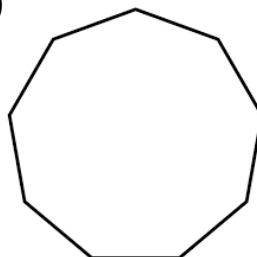
9)



10)



11)



12)



ANSWERS

- 1) Rectangle (quadrilateral)
- 2) Pentagon
- 3) Rhombus (quadrilateral)
- 4) Decagon
- 5) Square (quadrilateral)
- 6) Hexagon
- 7) Parallelogram (quadrilateral)
- 8) Octagon
- 9) Trapezium (quadrilateral)
- 10) Heptagon
- 11) Nonagon
- 12) Kite (quadrilateral)