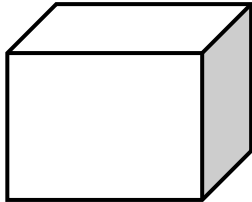



2D and 3D Shapes  
**WORKSHEET#1**

Write their name of each of the following shape.


1)



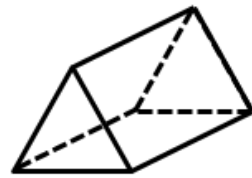
2)



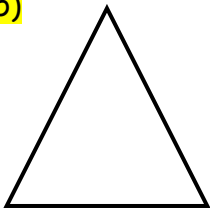
3)



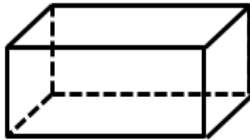
4)




5)



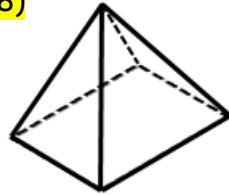
6)



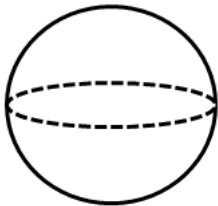
7)



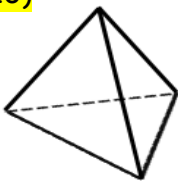
8)



9)



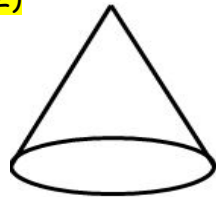
10)



11)




12)



13)



14)



**ANSWERS**

- 1) Cube
- 2) Circle
- 3) Cylinder
- 4) Triangular prism
- 5) Triangle
- 6) Cuboid
- 7) Heart
- 8) Pyramid
- 9) Sphere
- 10) Tetrahedron
- 11) Rectangle
- 12) Cone
- 13) Square
- 14) Oval