

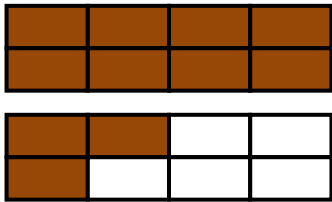
Mixed Numbers & Improper Fractions
WORKSHEET#2

For each of the following figures, write the mixed number and the improper fraction.


Mixed Number

Improper fraction

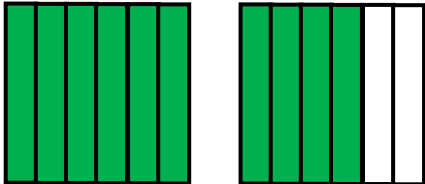
1.



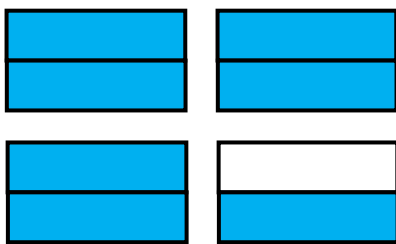
2.



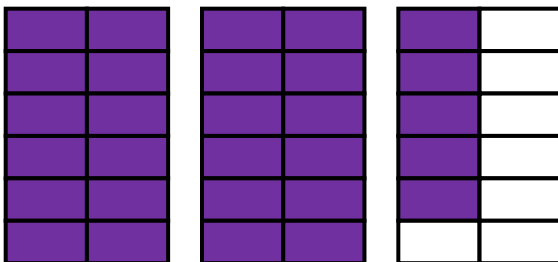
3.



4.



5.





ANSWERS

$$1) 1 \frac{3}{8}, \frac{11}{8}$$

$$2) 2 \frac{2}{3}, \frac{8}{3}$$

$$3) 1 \frac{4}{6}, \frac{10}{6}$$

$$4) 3 \frac{1}{2}, \frac{7}{2}$$

$$5) 2 \frac{5}{12}, \frac{29}{12}$$