

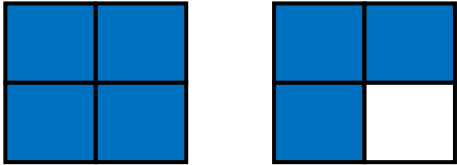
Mixed Numbers & Improper Fractions
WORKSHEET#1

Write the improper fraction and mixed number for each of the following figures.

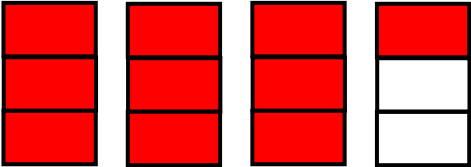
Mixed Number

Improper fraction


1.




2.



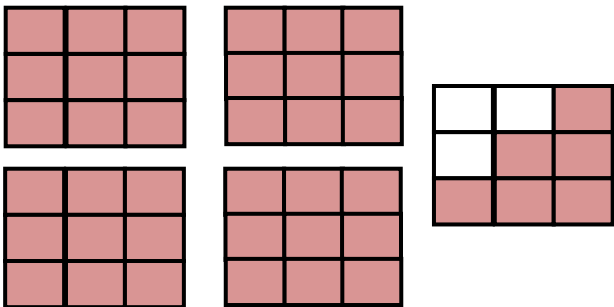
3.



4.



5.



ANSWERS

1) $1 \frac{3}{4}$, $\frac{7}{4}$

2) $3 \frac{1}{3}$, $\frac{10}{3}$

3) $2 \frac{2}{5}$, $\frac{12}{5}$

4) $1 \frac{1}{2}$, $\frac{3}{2}$

5) $4 \frac{6}{9}$, $\frac{42}{9}$