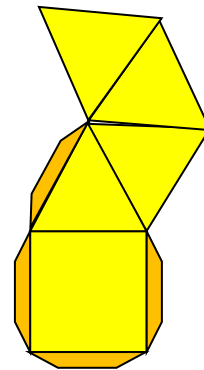
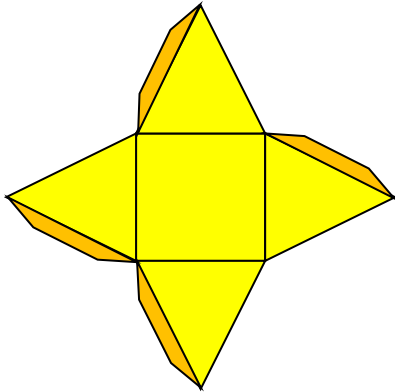


Nets  
WORKSHEET#8

1. ?

Work with a partner and build a squared - based pyramid. Each person should construct both pyramids.

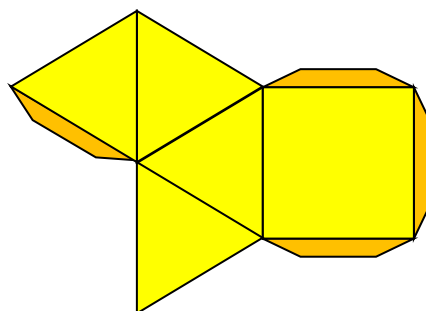


- Copy the nets above of squared - based pyramids onto 1 cm triangular dot grid paper. Draw tabs as shown.
- Paint with a different color the opposite sides of the pyramid.
- Using scissors, cut out the net and with the help of glue assemble all sides.

2.

Build a squared - based pyramid.

- Copy the net below of a squared - based pyramid onto 1 cm triangular dot grid paper. Draw tabs as shown.
- Using scissors, cut out the net and with the help of glue assemble all sides.
- What is the name of the 3 - D shape made of two such pyramids?





**2.**

c) Octahedron