
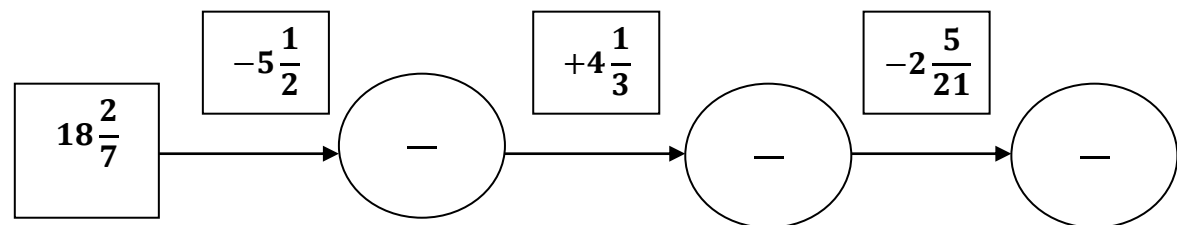
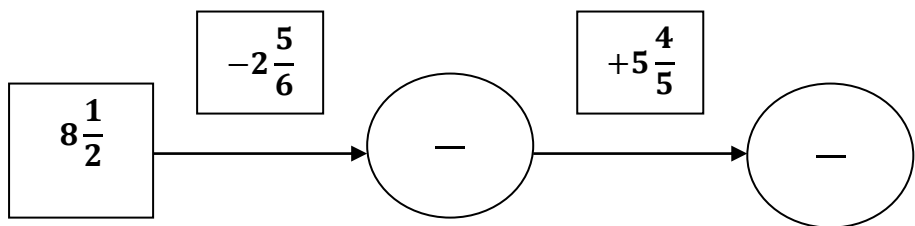
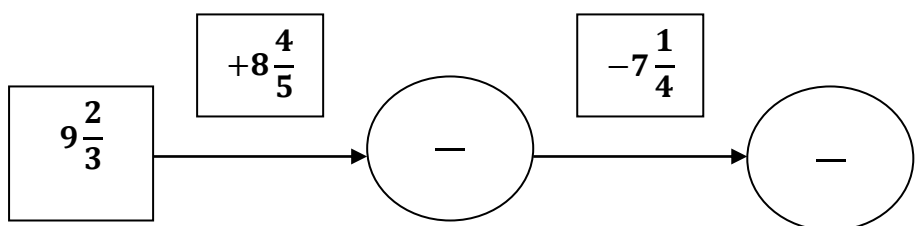


**Factors and fractions
WORKSHEET#10**

1.  Fill out the tables and the schemes to get the correct result.

-	$1\frac{3}{4}$	$2\frac{3}{7}$	$\frac{2}{3}$
$4\frac{4}{5}$			
$3\frac{4}{9}$			
$1\frac{2}{7}$			

-	$\frac{5}{12}$	$3\frac{5}{6}$	$5\frac{1}{2}$
$8\frac{2}{15}$			
$6\frac{4}{9}$			
$6\frac{4}{5}$			



ANSWERS 

1.

-	$1\frac{3}{4}$	$2\frac{3}{7}$	$2\frac{2}{3}$
$4\frac{4}{5}$	$3\frac{1}{20}$	$2\frac{13}{35}$	$4\frac{2}{15}$
$3\frac{4}{9}$	$1\frac{25}{36}$	$1\frac{1}{63}$	$2\frac{7}{9}$
$3\frac{6}{7}$	$2\frac{3}{28}$	$1\frac{3}{7}$	$3\frac{4}{21}$

-	$\frac{5}{12}$	$3\frac{5}{6}$	$5\frac{1}{2}$
$8\frac{2}{5}$	$7\frac{59}{60}$	$4\frac{17}{30}$	$2\frac{9}{10}$
$6\frac{4}{9}$	$6\frac{13}{36}$	$2\frac{17}{18}$	$1\frac{5}{18}$
$6\frac{4}{5}$	$6\frac{23}{60}$	$2\frac{29}{30}$	$1\frac{3}{10}$

