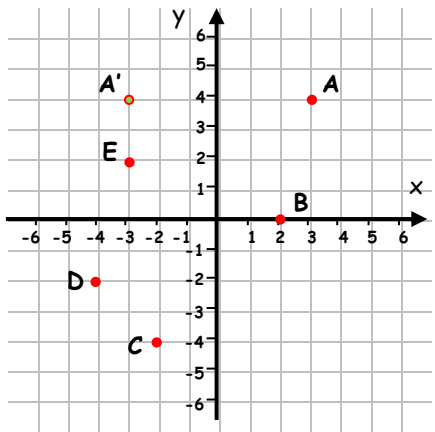


Coordinates WORKSHEET#7

1. ?

Write the coordinates of each point and its image when reflected in the y-axis.



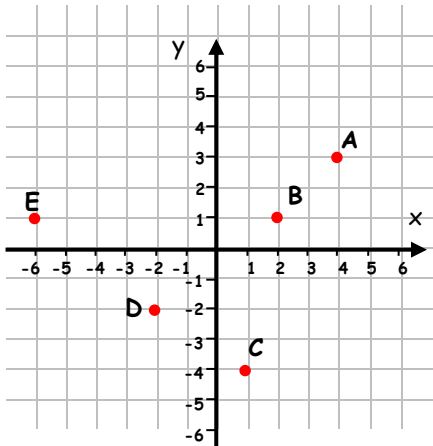
Example:
A (3, 4) A (-3, 4)



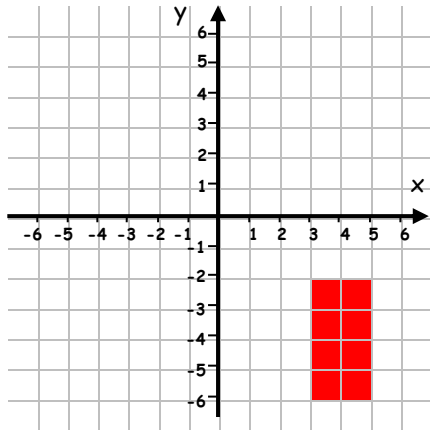
2. ?

Follow the instructions and complete the tasks.

- a) Write the coordinates of each point and its image when reflected in the x-axis:
- b) Reflect the shape in the y-axis

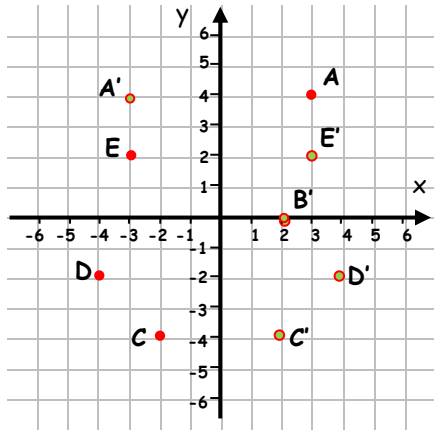


a)



b)

1.



2.

