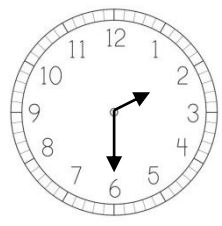
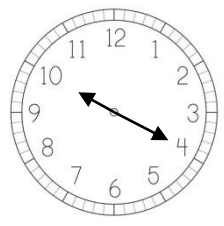
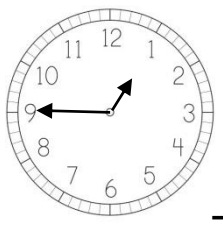


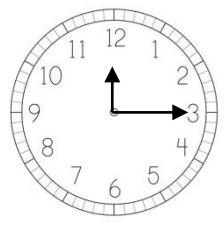
Changing Digits
WORKSHEET#8

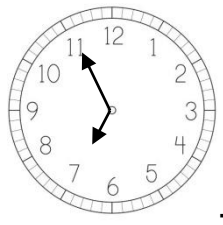
What time shows clock ? What is the total of the digits ?
What is maximum number that can be made with these digits ?

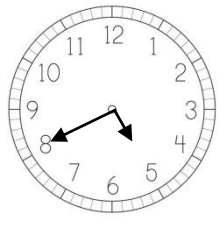
1.  **02:30**
5
3200

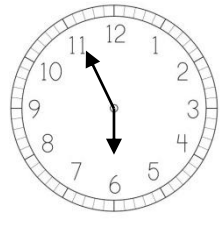
2.  _____

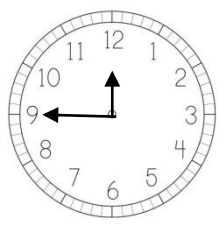
3.  _____

4.  _____

5.  _____

6.  _____

7.  _____

8.  _____



ANSWERS

1. 02:30 , 5 , 3200
2. 10:20 , 3 , 2100
3. 01:45 , 10 , 5410
4. 12:15 , 9 , 5211
5. 07:55 , 17 , 7550
6. 05:40 , 9 , 5400
7. 06:55 , 16 , 6550
8. 12:45 , 12 , 5421