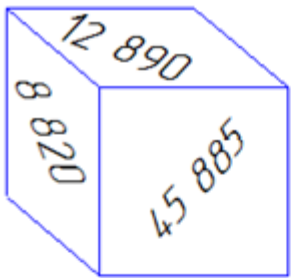


Adding mentally
WORKSHEET#8

Work out the missing numbers mentally.

The sum of the numbers written on two opposite faces of the cube is equal to the number written under the cube. Determine what numbers are written on the invisible faces of the cube.

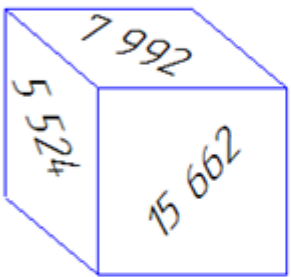
1.



56 125

= _____
= _____
= _____

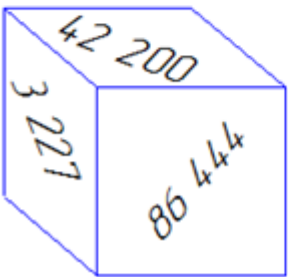
2.



32 994

= _____
= _____
= _____

3.



103 557

= _____
= _____
= _____



ANSWERS

1) 10 240; 47 305; 43 235;

2) 17 332; 27 470; 25 002;

3) 17 113; 100 330; 61357