
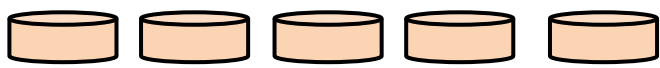
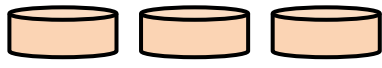
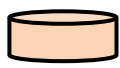



Pictographs
WORKSHEET#9

The pictograph below shows the number of cakes baked by 5 girls in a week.

Names	Number of Cakes
Tina	
Meena	
Leena	
Saleena	
Bareera	

Key:  represents 12 cakes

Answer the following questions.

- 1) How many cakes did Leena bake? _____
- 2) How many more cakes did Meena bake than Saleena? _____
- 3) Who baked the most number of cakes and how many?

- 4) Who baked just 12 cakes? _____
- 5) What is the total number of cakes Tina and Leena Baked?



ANSWERS

- 1) 36
- 2) 48
- 3) Bareera, 72
- 4) Saleena
- 5) 60