




Pictographs
WORKSHEET#3

The pictograph below shows the number of marks obtained by 6 students in their maths exam out of 100 total marks.

Name	Marks Obtained
Sara	
Zara	
Ali	
Marry	
Gabriel	
Ahmed	

Key:  represents 10 marks

Answer the following questions.

- 1) How many marks did Ali get? _____
- 2) Who got 100 out of 100 marks? _____
- 3) How many more marks did Sara score than Zara? _____
- 4) Who got 10 less than 100 marks? _____
- 5) Name the students who got 60 marks in the exam?

- 6) Who scored the least marks in the test? _____



ANSWERS

- 1) 50
- 2) Marry
- 3) 70
- 4) Sara
- 5) Ahmed and Gabriel
- 6) Zara