






The pictograph below shows the number of students present in class on each working day of the week.

Monday	
Tuesday	
Wednesday	
Thursday	
Friday	

Key:  represents 5 children

Answer the following questions.

- 1) How many children were present on Monday? _____
- 2) On which day of the week maximum children were present?

- 3) On which day of the week least number of children were present?

- 4) How many more children were present on Thursday than Wednesday? _____
- 5) On which days of the week same numbers of children were present? _____



ANSWERS

- 1) 35
- 2) Monday
- 3) Friday
- 4) 10
- 5) Tuesday and Wednesday