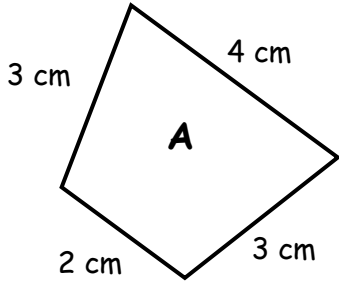


Finding Perimeters
WORKSHEET#9

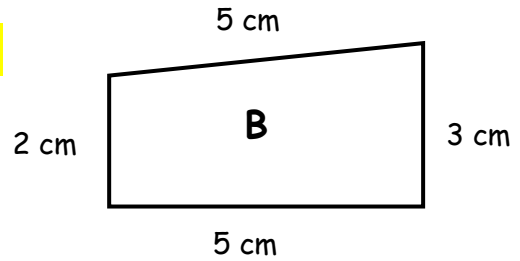
Find the **perimeter** of following shapes.
(The measurements are not according to the scale.)

1.



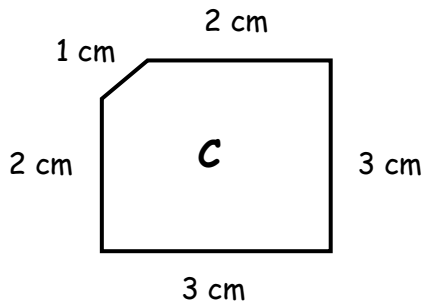
Perimeter = _____

2.



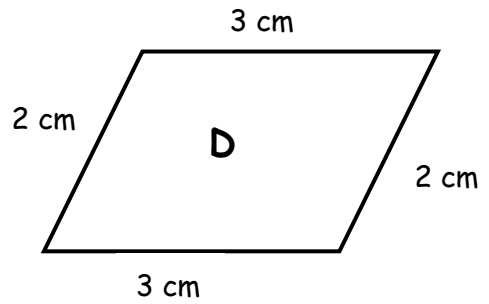
Perimeter = _____

3.



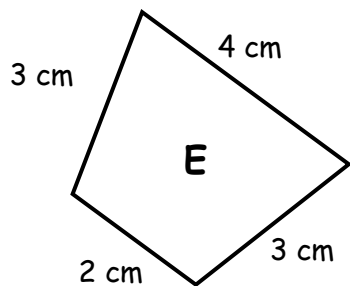
Perimeter = _____

4.



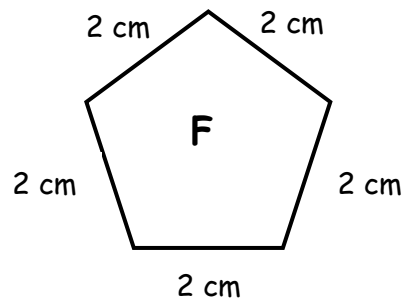
Perimeter = _____

5.



Perimeter = _____

6.



Perimeter = _____

7. Which shape has the greatest perimeter?



ANSWERS

1. 12 cm

2. 15 cm

3. 11 cm

4. 10 cm

5. 12 cm

6. 10 cm

Shape 'B' has the greatest perimeter.