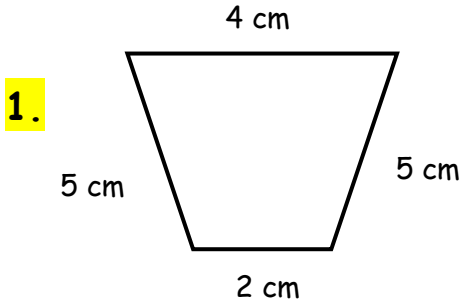
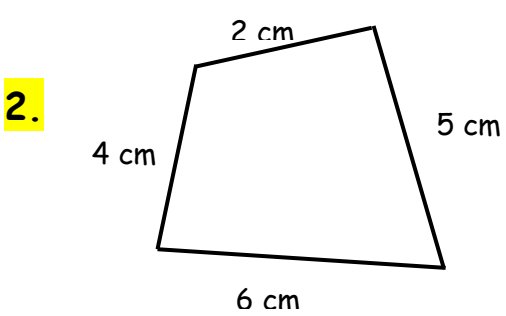


Finding Perimeters
WORKSHEET#8

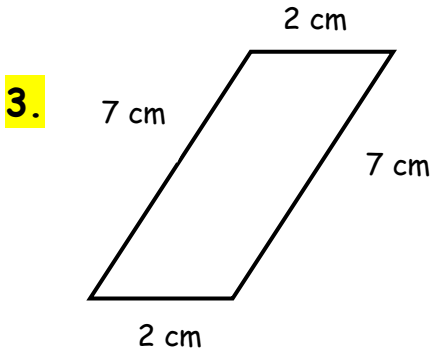
Choose the correct **perimeter** for each shape.
(The measurements are not according to the scale.)



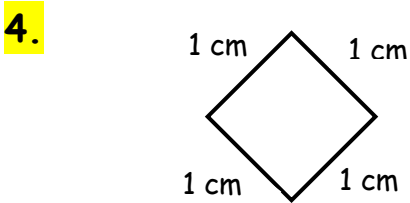
- a) 6 b) 10 c) 16



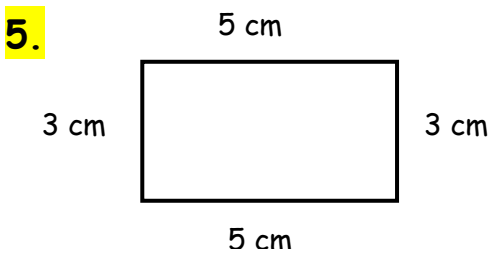
- a) 17 b) 11 c) 8



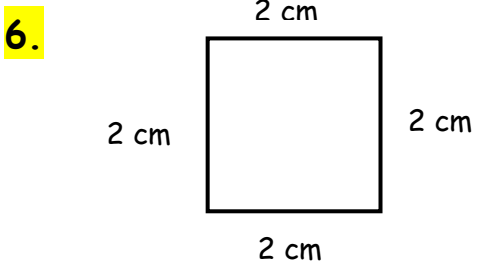
- a) 14 b) 18 c) 4



- a) 4 b) 2 c) 3



- a) 6 b) 10 c) 16



- a) 6 b) 8 c) 4



ANSWERS

1) c

2) a

3) b

4) a

5) c

6) b