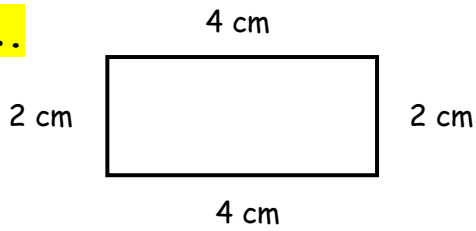


Choose the correct **perimeter** for each shape.

(The measurements are not according to the scale.)

1.

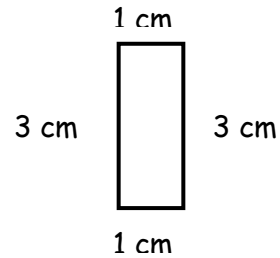


a) 10

b) 12

c) 8

2.

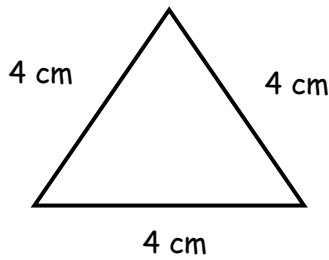


a) 8

b) 6

c) 4

3.

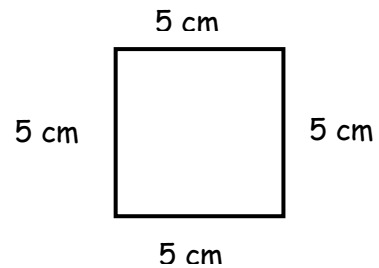


a) 16

b) 12

c) 4

4.

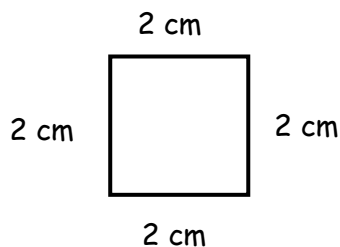


a) 55

b) 5

c) 20

5.

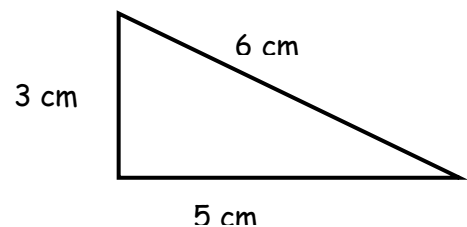


a) 6

b) 2

c) 8

6.



a) 14

b) 8

c) 11



ANSWERS

1) b

2) a

3) b

4) c

5) c

6) a