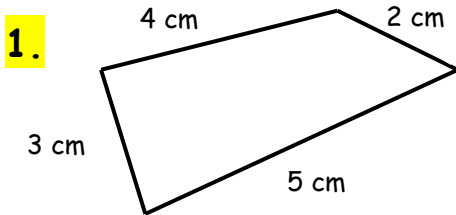
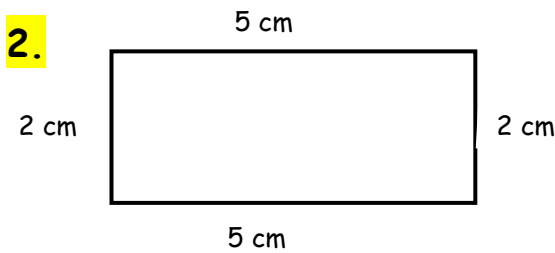


# Finding Perimeters WORKSHEET#4

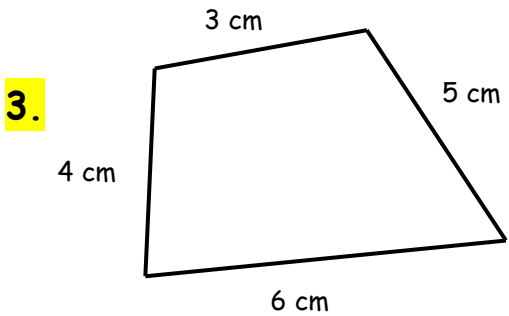
Calculate the **perimeter** of following Shapes.  
(The measurements are not according to the scale.)



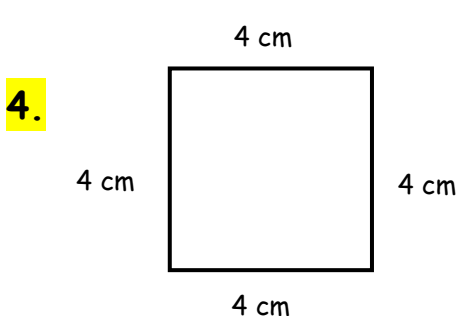
Perimeter = \_\_\_\_\_



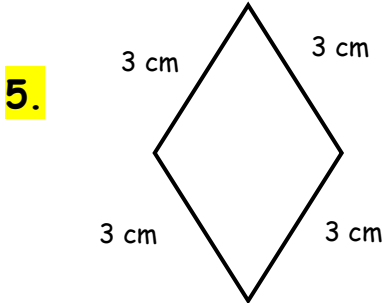
Perimeter = \_\_\_\_\_



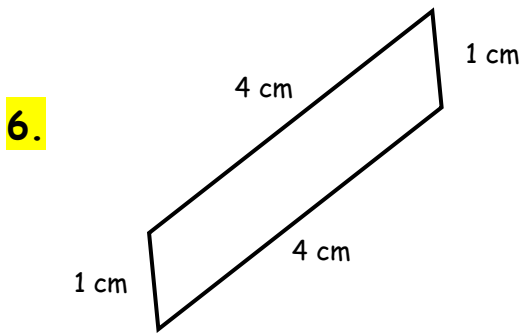
Perimeter = \_\_\_\_\_



Perimeter = \_\_\_\_\_



Perimeter = \_\_\_\_\_



Perimeter = \_\_\_\_\_



## ANSWERS

- 1) 14 cm
- 2) 14 cm
- 3) 18 cm
- 4) 16 cm
- 5) 12 cm
- 6) 10 cm