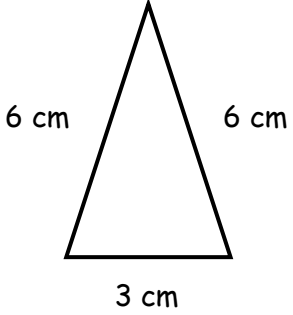


Finding Perimeters
WORKSHEET#3

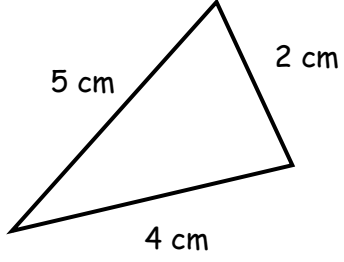
Find the **perimeter** of following TRIANGLES.
(The measurements are not according to the scale.)

1.



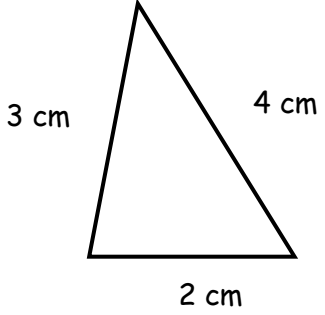
Perimeter = _____

2.



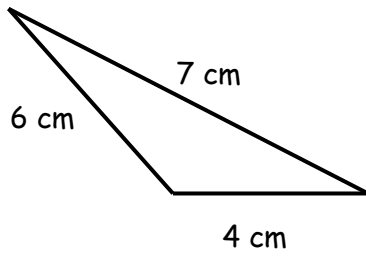
Perimeter = _____

3.



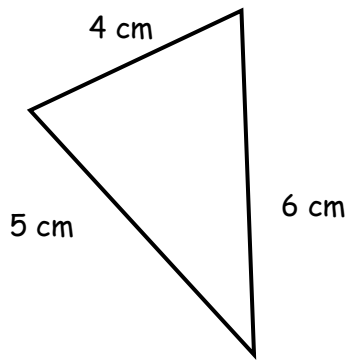
Perimeter = _____

4.



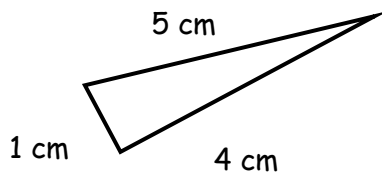
Perimeter = _____

5.



Perimeter = _____

6.



Perimeter = _____



ANSWERS

- 1) 15 cm
- 2) 11 cm
- 3) 9 cm
- 4) 17 cm
- 5) 15 cm
- 6) 10 cm