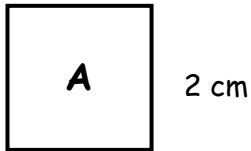


Finding Perimeters WORKSHEET#2

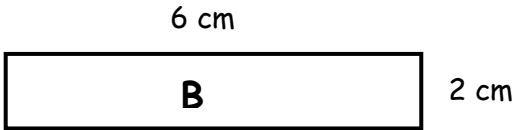
Find the **perimeter** of following squares and rectangles by adding the lengths of the sides.
(The measurements are not according to the scale.)

1.



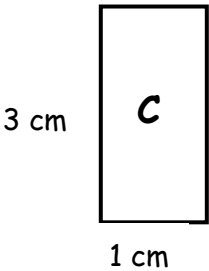
Perimeter = _____

2.



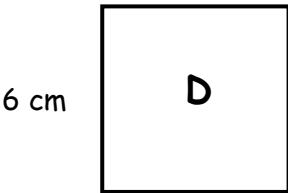
Perimeter = _____

3.



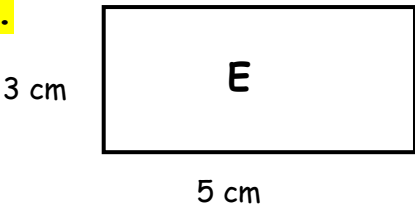
Perimeter = _____

4.



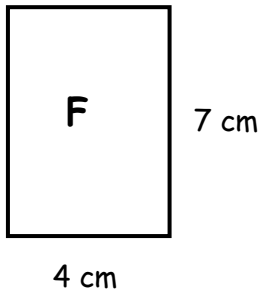
Perimeter = _____

5.



Perimeter = _____

6.



Perimeter = _____

7. Which shape has the greatest perimeter? _____

ANSWERS

- 1) 8 cm
- 2) 16 cm
- 3) 8 cm
- 4) 24 cm
- 5) 16 cm
- 6) 22 cm

Shape 'D' has the greatest perimeter.