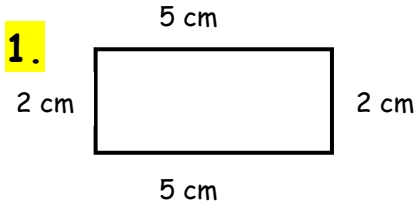
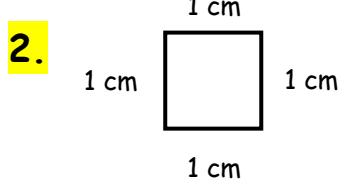


Finding Perimeters WORKSHEET#1

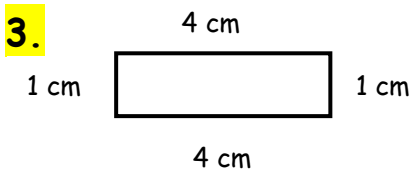
Find the **perimeter** of following squares and rectangles.
(The measurements are not according to the scale.)



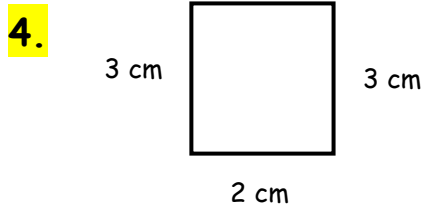
Perimeter = _____



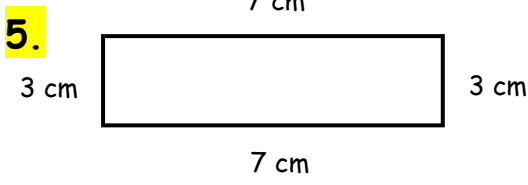
Perimeter = _____



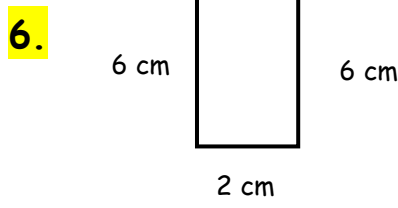
Perimeter = _____



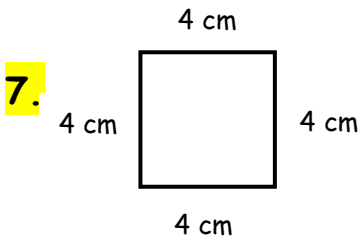
Perimeter = _____



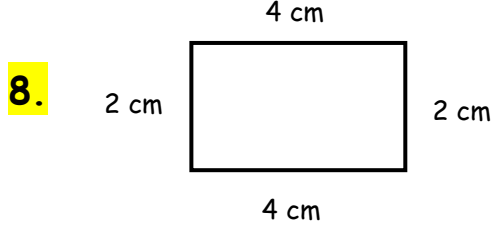
Perimeter = _____



Perimeter = _____



Perimeter = _____



Perimeter = _____



ANSWERS

1. 14 cm
2. 4 cm
3. 10 cm
4. 10 cm
5. 20 cm
6. 16 cm
7. 16 cm
8. 12 cm