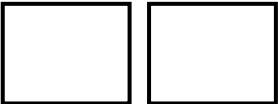
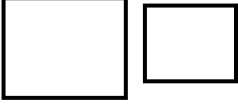
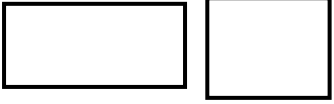


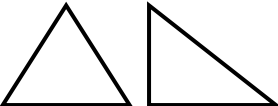
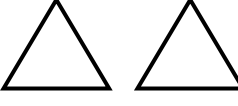
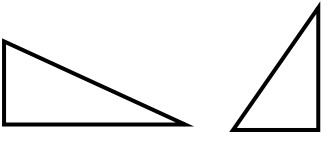
Congruent Shapes
WORKSHEET#9

Choose the correct answer.

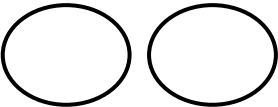
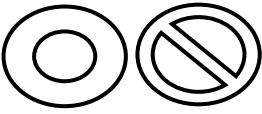
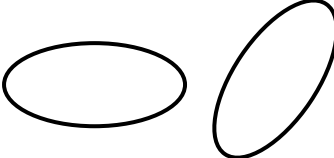
1) Which of the following pair of figures are congruent?

- a)  b)  c) 

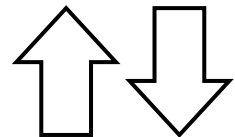
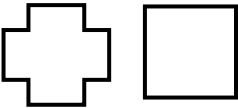

2) Which of the following pair of figures are congruent?

- a)  b)  c) 

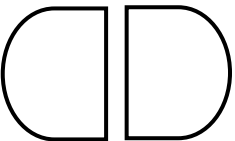


3) Which of the following pair of figures are not congruent?

- a)  b)  c) 

4) Which of the following pair of figures are congruent?

- a)  b)  c) 

5) Which of the following pair of figures are not congruent?

- a)  b)  c) 



ANSWERS

- 1) a
- 2) b
- 3) b
- 4) a
- 5) c