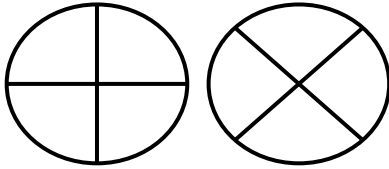


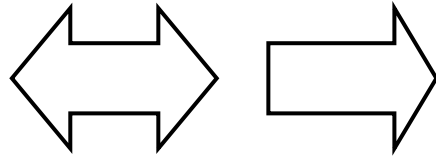
Congruent Shapes  
**WORKSHEET#3**

Write **congruent** or **not congruent** for each pair of shapes.


1)



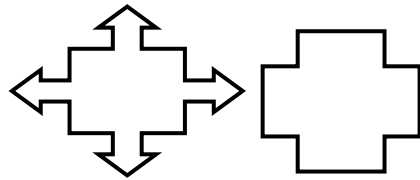
2)




3)



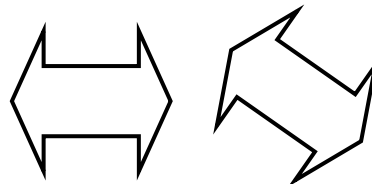
4)



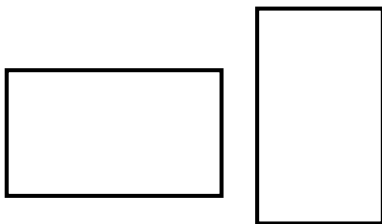
5)



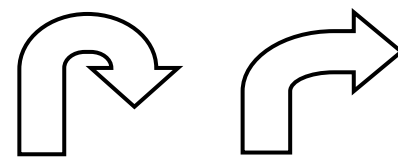
6)



7)



8)





## ANSWERS

1) congruent

2) not congruent

3) congruent

4) not congruent

5) not congruent

6) congruent

7) congruent

8) not congruent