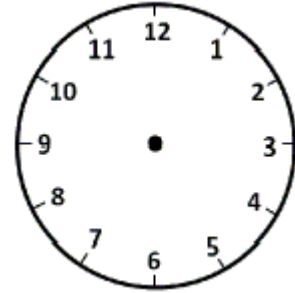


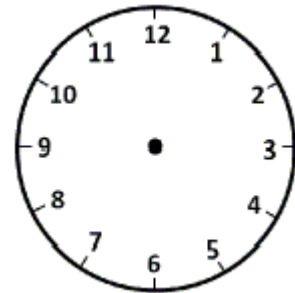
Solve the following time word problems. Draw hands on the clock for the time asked to find out.

1) My favorite TV program will start at 7:00 pm. It's a 2 hour 30 minute long program. When will it end?

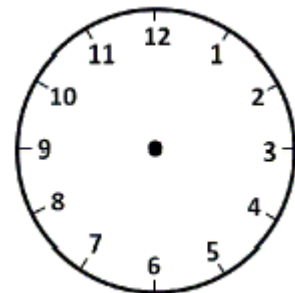
The program ends at :



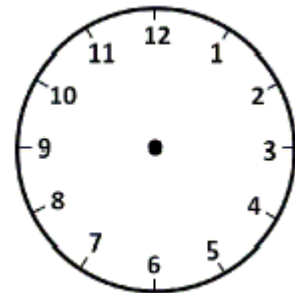
2) My office starts at 9:15 am. The lunch break starts 4 hours later. When does my lunch break start?



3) I went to shopping with my mother at 11:45 am on last Sunday. We woke up 3 hours earlier. When did we wake up?



4) We watched a horror movie last weekend. It was a 3 hour long movie. If the movie began at 9:00pm, when did it end?





ANSWERS

1) 9:30 pm

2) 1:15 pm

3) 8:45 am

4) 12:00 am