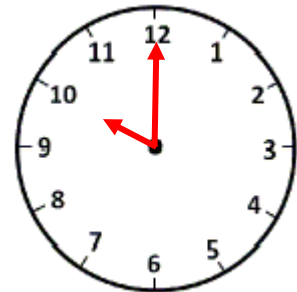
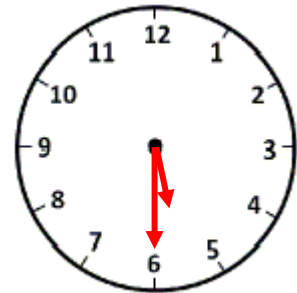


Solve the following time word problems.

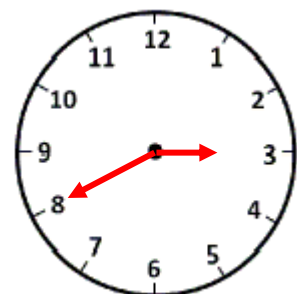
1) Jimmy's maths class begins at the time shown on the clock. It's a 2 hour long class. At what time does the class end?



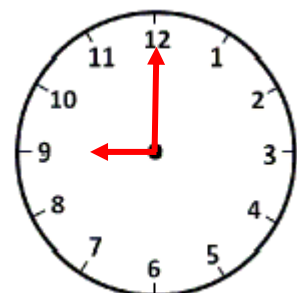
2) Sara works for 1 hour in the garden every day. If she begins working at 5:30pm, when does she get done with her work?



3) Tina's cooking class begins at the time shown on the clock. It's a three hour long class. When does it end?



4) Finn goes for swimming at the time shown on the clock. He swims for 2 hours every day. At what time does he stop swimming?





**ANSWERS**

1) 12:00 pm

2) 6:30 pm

3) 6:40 pm

4) 11:00 am