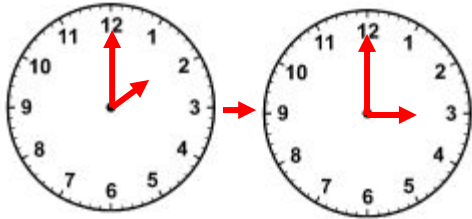


WORKSHEET#9

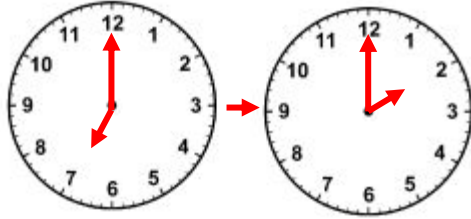
How much time has Elapsed between each pair of clocks?

1)



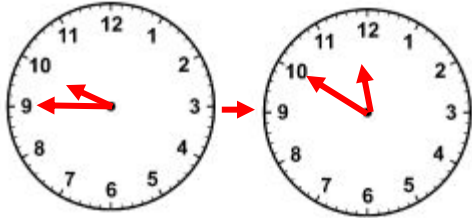
ELAPSED TIME: _____

2)



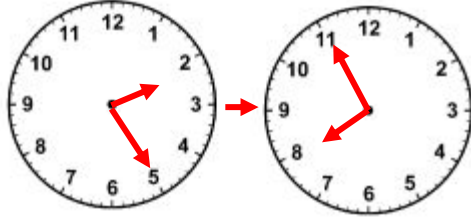
ELAPSED TIME: _____

3)



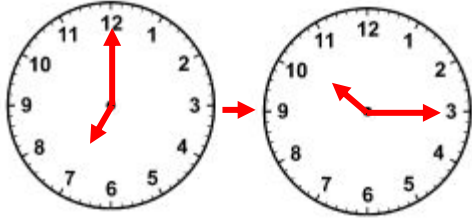
ELAPSED TIME: _____

4)



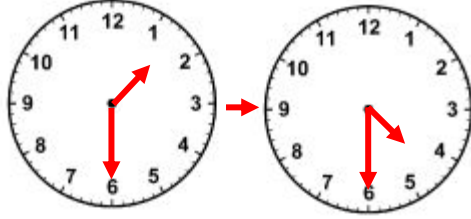
ELAPSED TIME: _____

5)



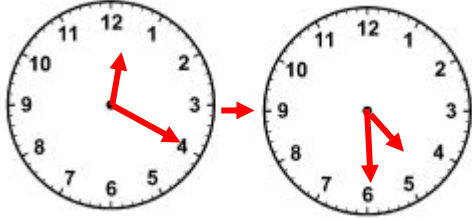
ELAPSED TIME: _____

6)



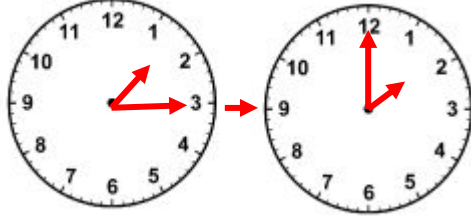
ELAPSED TIME: _____

7)



ELAPSED TIME: _____

8)



ELAPSED TIME: _____



ANSWERS

1) 1 hours

2) 7 hours

3) 2 hours 5 minutes

4) 5 hours 30 minutes

5) 3 hours 15 minutes

6) 3 hour

7) 4 hours 10 minutes

8) 45 minutes