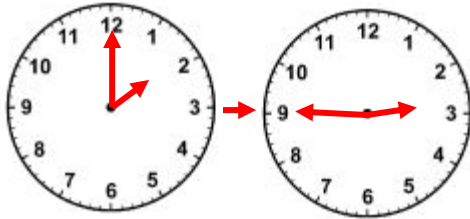


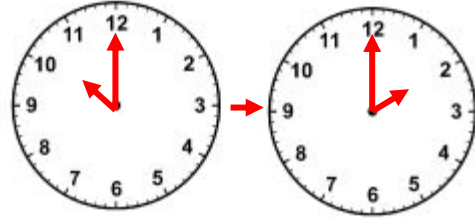
How much time has Elapsed between each pair of clocks?

1)



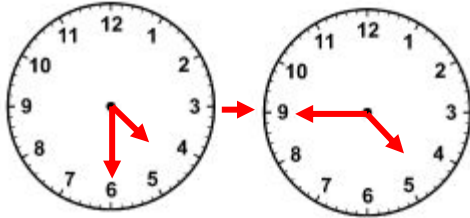
ELAPSED TIME: _____

2)



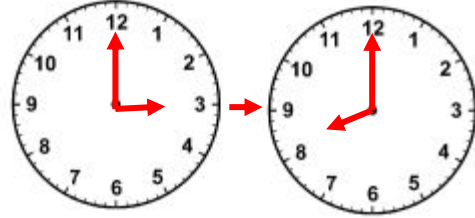
ELAPSED TIME: _____

3)



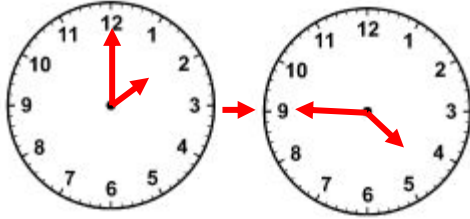
ELAPSED TIME: _____

4)



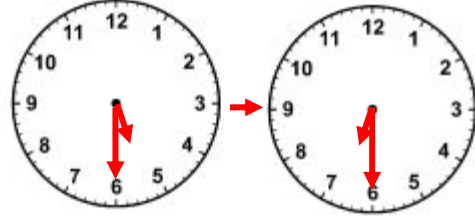
ELAPSED TIME: _____

5)



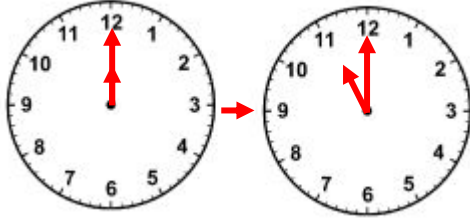
ELAPSED TIME: _____

6)



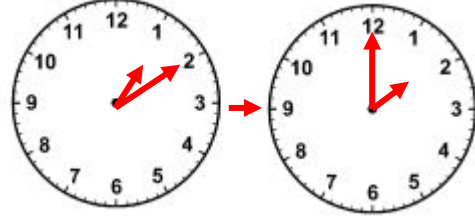
ELAPSED TIME: _____

7)



ELAPSED TIME: _____

8)



ELAPSED TIME: _____



ANSWERS

1) 45 minutes

2) 8 hours

3) 15 minutes

4) 5 hours

5) 2 hours 45 minutes

6) 1 hour

7) 11 hours

8) 50 minutes