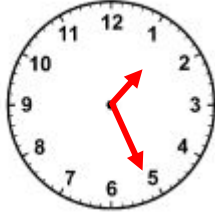
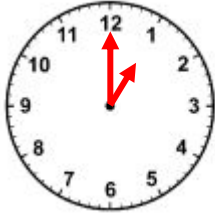


How much time has Elapsed?

START TIME

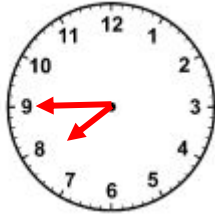
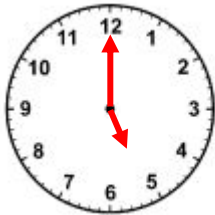
END TIME

1)



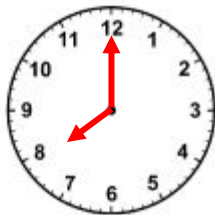
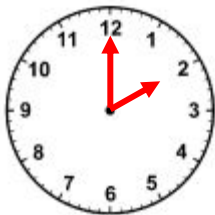
Elapsed Time: _____

2)




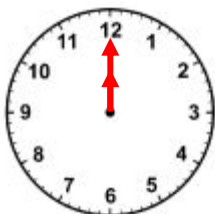
Elapsed Time: _____

3)



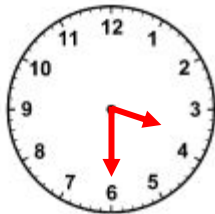
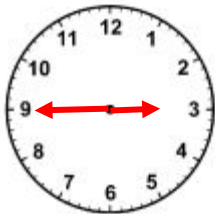
Elapsed Time: _____

4)



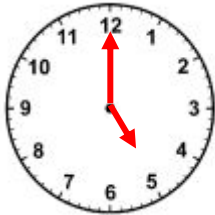
Elapsed Time: _____

5)



Elapsed Time: _____

6)



Elapsed Time: _____



ANSWERS

1) 25 minutes

2) 2 hours 45 minutes

3) 6 hours

4) 10 hours

5) 45 minutes

6) 7 hours