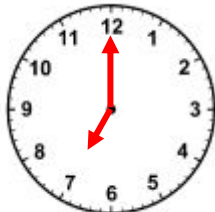
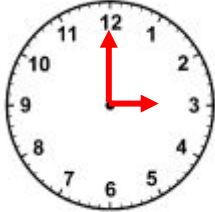


How much time has Elapsed?

START TIME


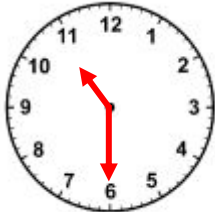
END TIME

1)



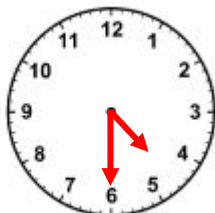
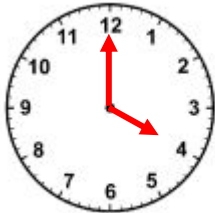
Elapsed Time: \_\_\_\_\_

2)



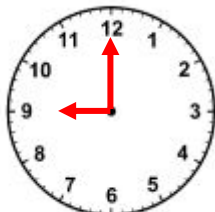
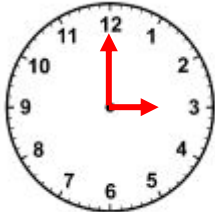
Elapsed Time: \_\_\_\_\_

3)



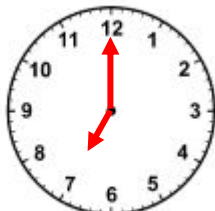
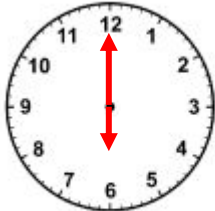
Elapsed Time: \_\_\_\_\_

4)



Elapsed Time: \_\_\_\_\_

5)



Elapsed Time: \_\_\_\_\_



**ANSWERS**

1) 4 hours

2) 3 hours 15 minutes

3) 30 minutes

4) 6 hours

5) 1 hour