
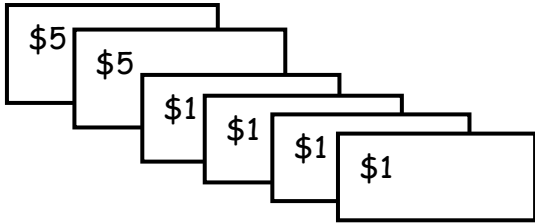


Counting and Making Bills  
**WORKSHEET#9**

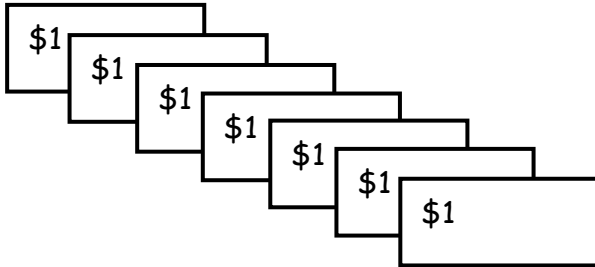
Count the bills and match with the item you can buy with it.

1.



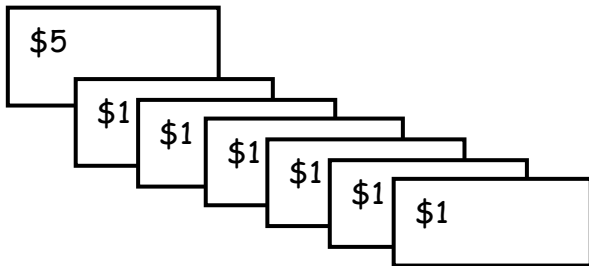
\$11

2.




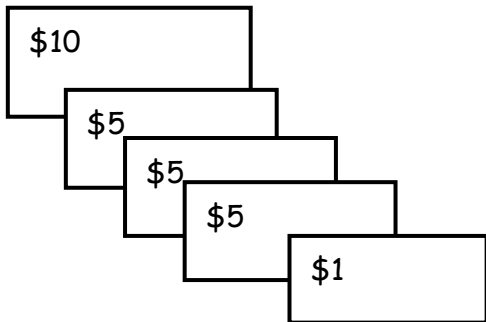
\$26

3.



\$7

4.



\$14



## ANSWERS

- 1) Mango for \$14
- 2) Banana for \$7
- 3) Apple for \$11
- 4) Strawberry for \$26