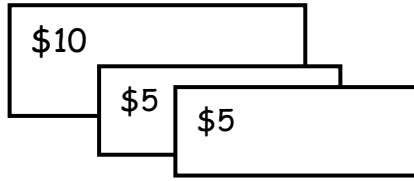



The shopkeeper has displayed a price list of the items at his shop on a wall. Count the bills below & write what you can buy with it.

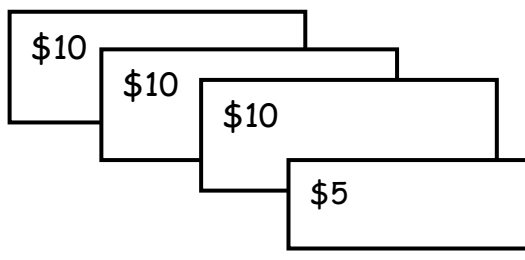

PRICE LIST

1. Toy Car - \$ 20	2. Barbie Doll - \$ 17
3. Teddy - \$ 35	4. Ball - \$ 5

1.   _____

2.   _____

3.   _____

4.   _____



ANSWERS

1. Ball
2. Toy car
3. Barbie doll
4. Teddy