



Answer the following questions.


1) How many days are there in February?



2) What is the maximum number of days a month can have?



3) How many days are there in April?




4) Name the two consecutive months after 'May'?




5) Which month comes before September?

6) Which month comes after January?

7) How many months does a year have?



8) How many days are there in February when it's a Leap Year?



9) Which is the last month of the year?



ANSWERS

1) 28

2) 31

3) 30

4) June, July

5) August

6) February

7) 12

8) 29

9) December