

Match the time with the clock that shows that time.


1



A

12:00

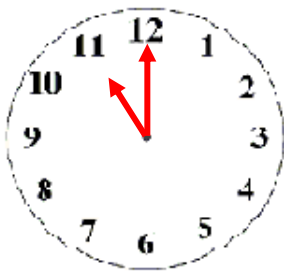
2



B

3:00

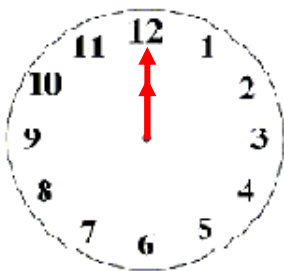
3



C

7:00

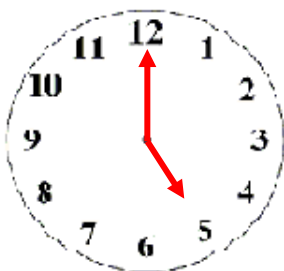
4



D

5:00

5



E

11:00



ANSWERS

WORKSHEET#5

1) C

2) B

3) E

4) A

5) D