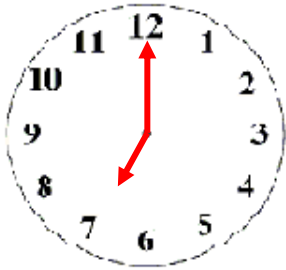


Match the clock with the time it shows.


1



A

6:00

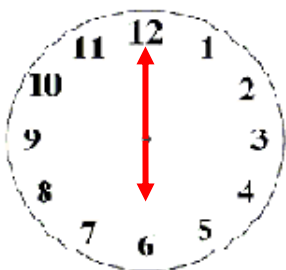
2



B

10:00

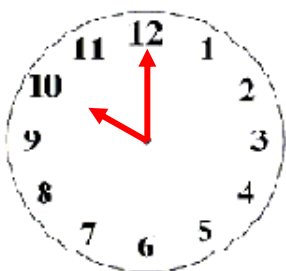
3



C

3:00


4



D

7:00

5



E

4:00



ANSWERS

WORKSHEET#10

1) D

2) E

3) A

4) B

5) C