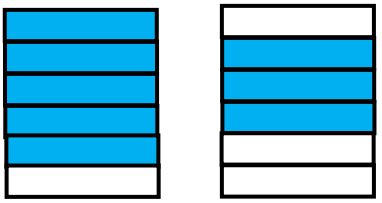

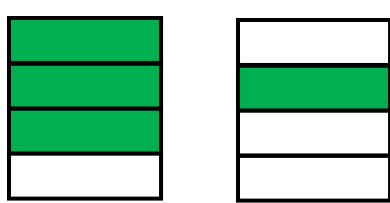

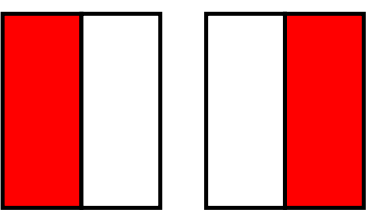



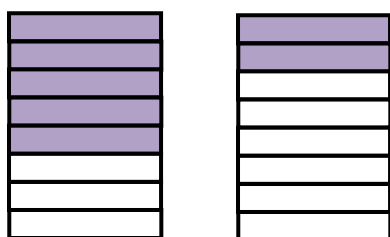

WORKSHEET#8

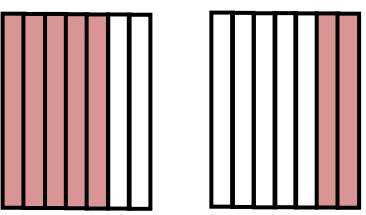

Write the fractions for the shaded figures and then subtract them.

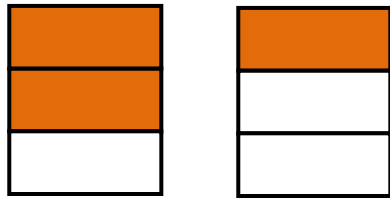

1. 
 $\frac{4}{5} - \frac{3}{5} =$ 

2. 
 $\frac{3}{4} - \frac{1}{4} =$ 

3. 
 $\frac{1}{2} - \frac{1}{2} =$ 

4. 
 $\frac{5}{8} - \frac{2}{8} =$ 

5. 
 $\frac{5}{6} - \frac{1}{6} =$ 

6. 
 $\frac{2}{3} - \frac{1}{3} =$ 



ANSWERS

WORKSHEET#8

1) $5/6 - 3/6 = 2/6$

2) $3/4 - 1/4 = 2/4$

3) $1/2 - 1/2 = 0/2$

4) $5/8 - 2/8 = 3/8$

5) $5/7 - 2/7 = 3/7$

6) $2/3 - 1/3 = 1/3$