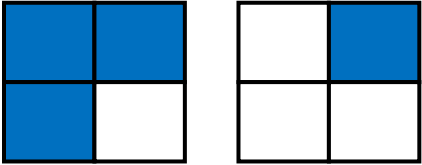

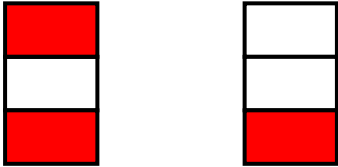



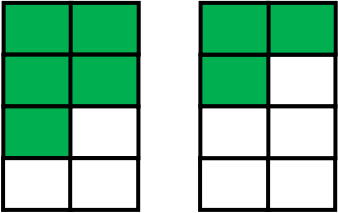
Write the fractions for the shaded figures and then subtract them.


1. 

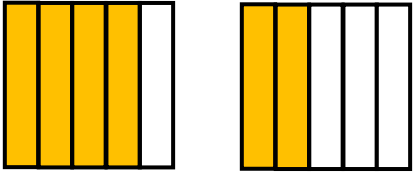
_____ - _____ = 


2. 

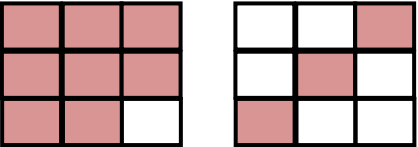
_____ - _____ = 


3. 

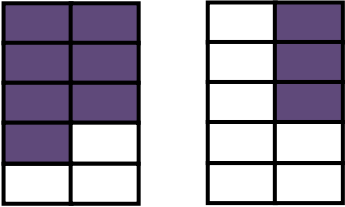
_____ - _____ = 


4. 

_____ - _____ = 

5. 

_____ - _____ = 

6. 

_____ - _____ = 



ANSWERS

WORKSHEET#1

1) $3/4 - 1/4 = 2/4$

2) $2/3 - 1/3 = 1/3$

3) $5/8 - 3/8 = 2/8$

4) $4/5 - 2/5 = 2/5$

5) $8/9 - 3/9 = 5/9$

6) $7/10 - 3/10 = 4/10$