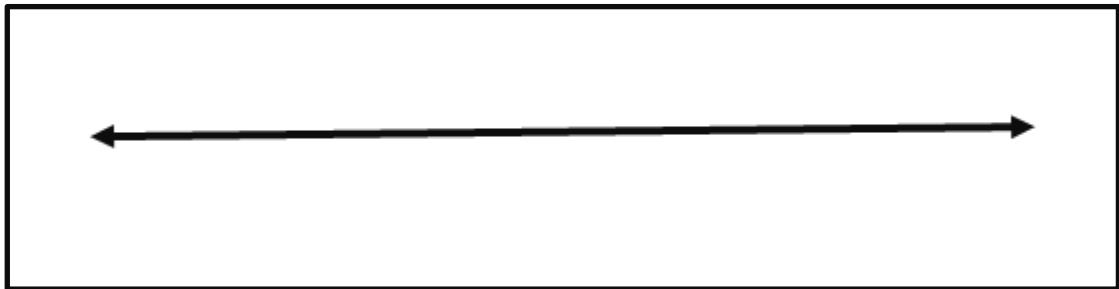





Worksheet 9: Solve the following problem using the empty number line.


1. Ms. Maria bought a laptop amounting to \$ 900. She decided to buy another one, which cost \$850. How much did she pay overall?



2. Ms. Martha bought some items amounting to \$1200, a queen size bed which costs \$999 and a fruit blender which costs \$30. If she gets a fifty percent (50%) discount on the fruit blender, how much will she pay?



3. A group of three friends wants to go on a vacation. Each plane ticket cost \$73. How much will they pay for the plane ticket back and forth?





The value of



. From ones to ten thousands

Answer Key:

Worksheet No.9

Observe proper units

1. \$1750
2. \$2214
3. \$420