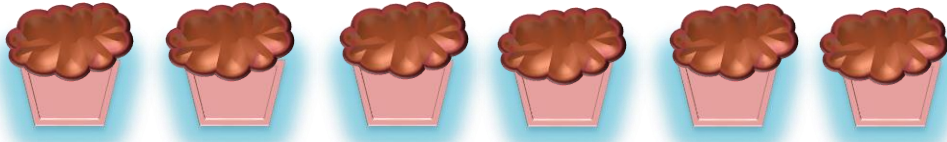


Multiplication

Worksheet 4

Q1. Solve the following word problems:

- i. There are 70 cupcakes in one pack. So how many altogether in 1000 packs?



$$\boxed{70} \times \boxed{} = \boxed{}$$

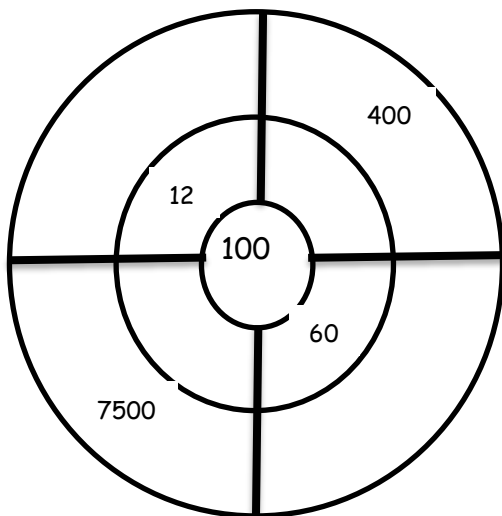
- ii. In one pack there are 10 cookies. So, how many cookies altogether in 80 packs?



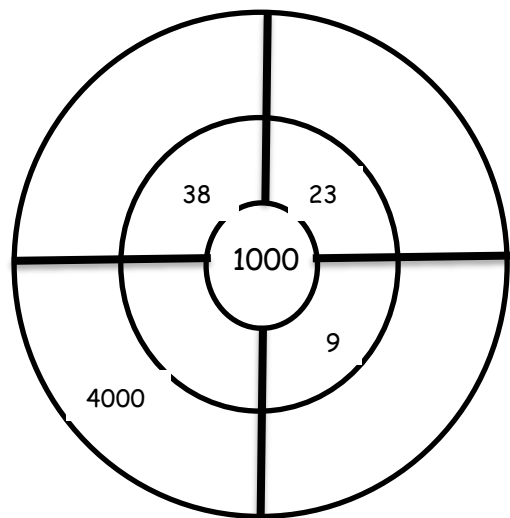
$$\boxed{} \times \boxed{} = \boxed{}$$

Q2. Complete target circle:

i.



ii.



ANSWERS

Q1

- i. $70 \times 1000 = 70000$
- ii. $10 \times 80 = 800$

Q2

- i. $100 \times 12 = 1200$
 $100 \times 75 = 7500$
 $100 \times 60 = 6000$
 $100 \times 4 = 400$
- ii. $1000 \times 38 = 38000$
 $1000 \times 4 = 4000$
 $1000 \times 9 = 9000$
 $1000 \times 23 = 23000$