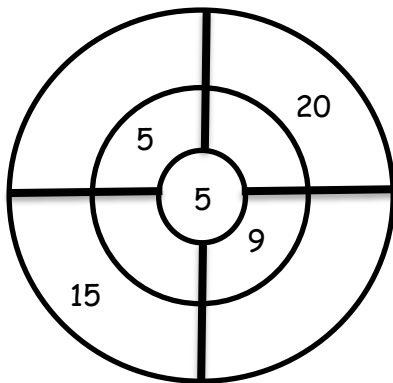


## Multiplication

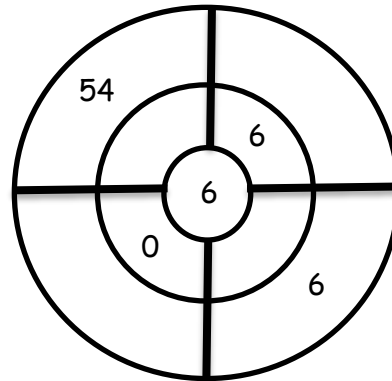
### Worksheet 6

Q1. Complete target circles:

a.

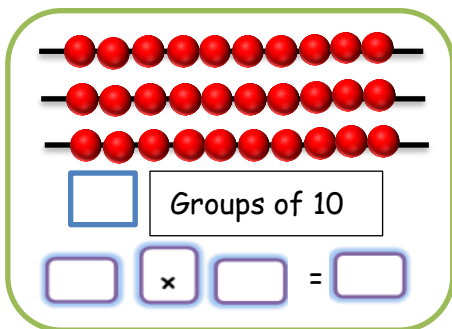


b.

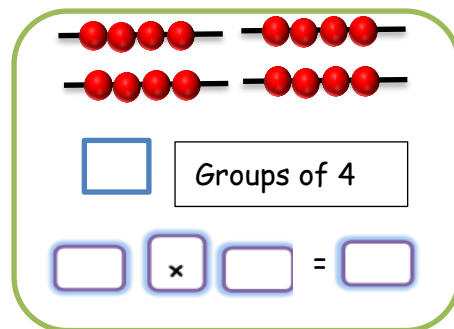


Q2. What are the missing numbers?

a.



b.



Q3. Complete the tables:

a.

	2	8	0	5	7	4	3	6	10
6 ×			0			24			

b.

	3	5	10	2	6	4	5	9	7
9 ×			90			36			

## ANSWERS

### WORKSHEET NO.6

Q1. a.  $5 \times 5 = 25$

$$5 \times 9 = 45$$

$$5 \times 3 = 15$$

$$5 \times 4 = 20$$

b.  $6 \times 9 = 54$

$$6 \times 6 = 36$$

$$6 \times 0 = 0$$

$$6 \times 1 = 6$$

Q2. a. 3 groups of 10

$$3 \times 10 = 30$$

b. 4 groups of 4

$$4 \times 4 = 16$$

Q3. a.  $6 \times 2 = 12$ ,  $6 \times 8 = 48$ ,  $6 \times 0 = 0$ ,  $6 \times 5 = 30$ ,  $6 \times 7 = 42$ ,  $6 \times 3 = 18$ ,  $6 \times 6 = 36$ ,  $6 \times 10 = 60$

b.  $9 \times 3 = 27$ ,  $9 \times 5 = 45$ ,  $9 \times 2 = 18$ ,  $9 \times 6 = 54$ ,  $9 \times 5 = 45$ ,  $9 \times 9 = 81$ ,  $9 \times 7 = 63$