


Multiplication word problems


Worksheet 4

Q1. There are 6 sticks in each box. How many sticks are there in 3 boxes?



$$\square \times \square = \square$$

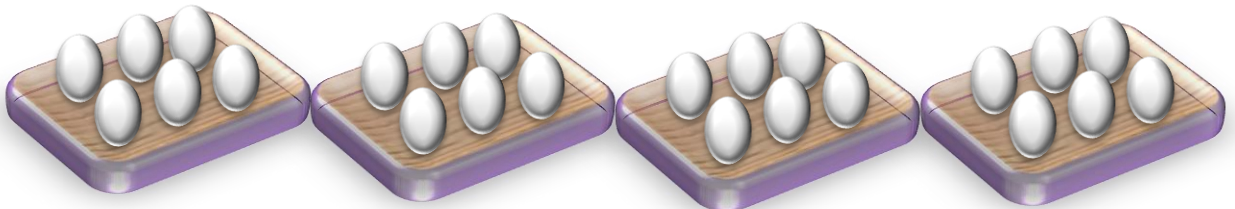
Q2. There are 7 tomatoes in one bag. How many tomatoes are there in 2 bags?



(Draw same number of Tomatoes in this bag and multiply)

$$\square \times \square = \square$$

Q3. Write the multiplication sentence for each of the pictures



$$\square \times \square = \square$$

ANSWERS

WORKSHEET NO.4

Q1. $6 \times 3 = 18$

Q2. Draw 7 apples in the box

$$7 \times 2 = 14$$

Q3. $6 \times 4 = 24$