
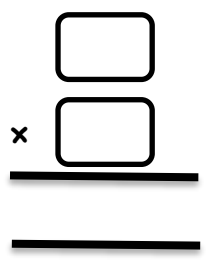


**Multiplication**


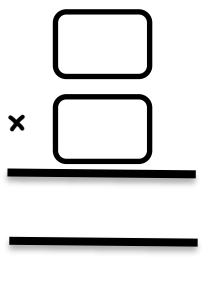
**Worksheet 9**

**Q1. Write a multiplication sentences for each of the following.**


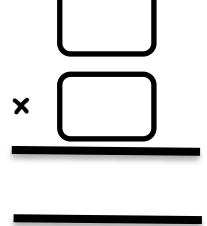
a.

b.

c.

**d. Multiply**

$7 \times 2 = \square$	$2 \times 7 = \square$
$9 \times 7 = \square$	$7 \times 9 = \square$
$8 \times 6 = \square$	$6 \times 8 = \square$

## ANSWERS

### WORKSHEET NO.9

Q1. a.  $3 \times 3 = 9$

b.  $4 \times 5 = 20$

c.  $2 \times 7 = 14$

d.  $7 \times 2 = 14$ ,  $2 \times 7 = 14$

$9 \times 7 = 63$ ,  $7 \times 9 = 63$

$8 \times 6 = 48$ ,  $6 \times 8 = 48$