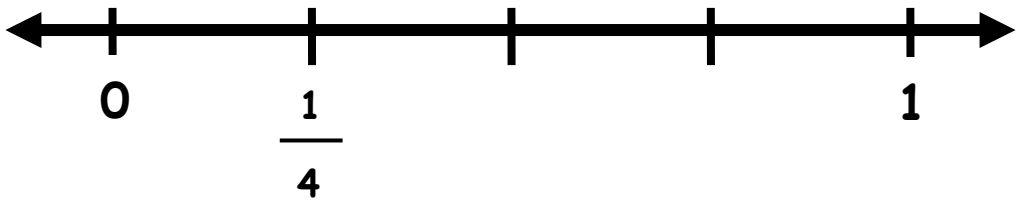
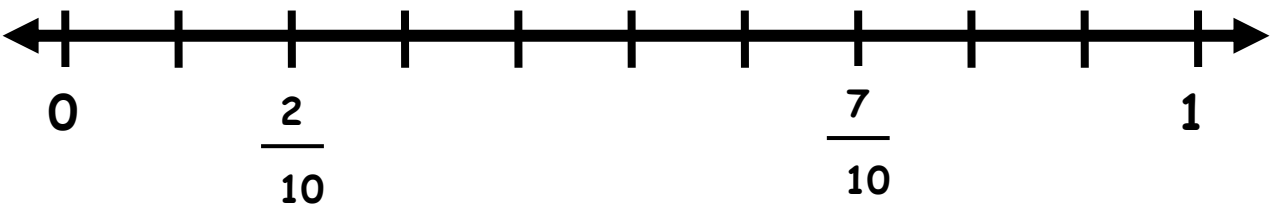


Fill in the missing fractions on the number lines below.

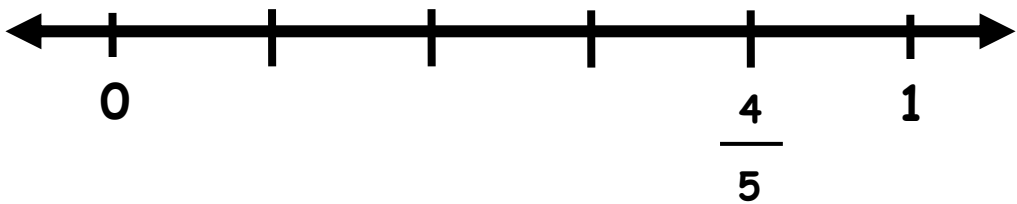
1.



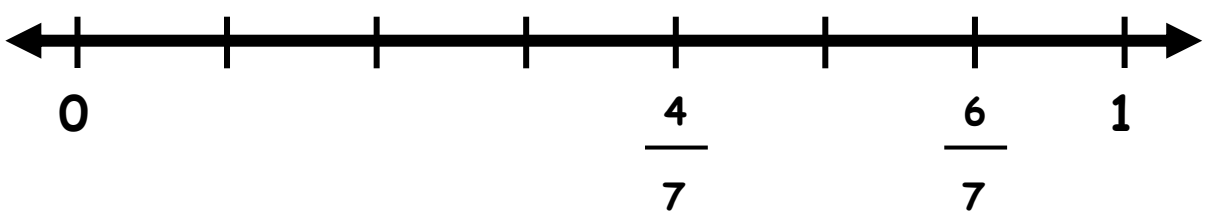
2.



3.



4.





ANSWERS

WORKSHEET#8

1) $2/4$, $3/4$

2) $1/10$, $3/10$, $4/10$, $5/10$, $6/10$, $8/10$, $9/10$

3) $1/5$, $2/5$, $3/5$

4) $1/7$, $2/7$, $3/7$, $5/7$