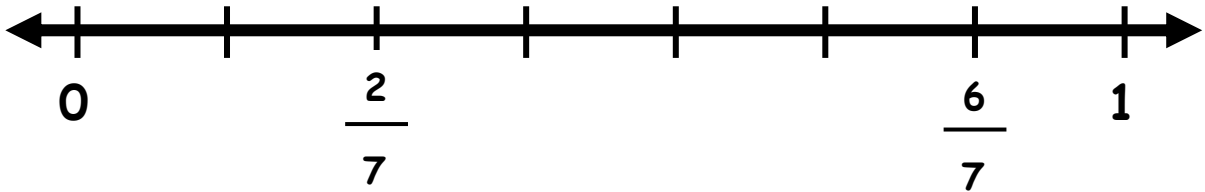
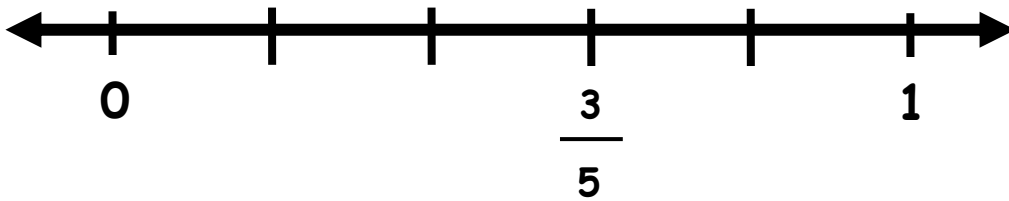


Fill in the missing fractions on the number lines below.

1.



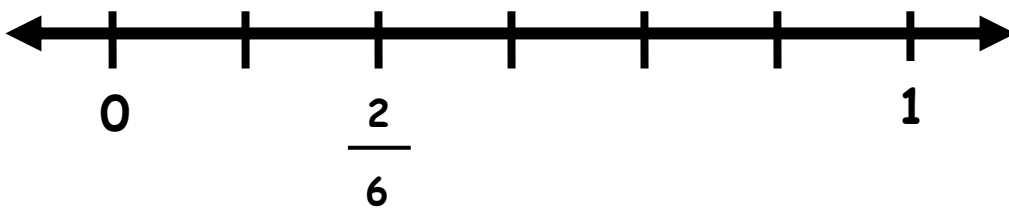
2.



3.



4.





ANSWERS

WORKSHEET#7

1) $1/7, 3/7, 4/7, 5/7$

2) $1/5, 2/5, 4/5$

3) $1/3$

4) $1/6, 3/6, 4/6, 5/6$