



Solve the following fraction word problems.


1) There are 10 balls in the toy basket. Some are red and some are yellow. If 7 balls are red, what fractions of balls are yellow?




2) Mommy gave 15 biscuits to eat for lunch. I gave 9 to my friend. What fraction of biscuits I gave to my friend?




3) Simba has 3 big books and 8 small books in her bag. What fraction of books in her bag is small?




4) I am reading a book which has a total of 25 pages. I have read 16 pages. What fraction of pages I have read?



5) There are 50 fish in a pond. Sara brings a net catches 19 fish. What fraction of fish did she catch?



6) Tina bought 18 pencils from a shop. She gives 7 pencils to her friends. What fraction of pencils she has now?





ANSWERS

WORKSHEET#1

1) $3/10$

2) $9/15$

3) $8/11$

4) $16/25$

5) $19/50$

6) $11/18$