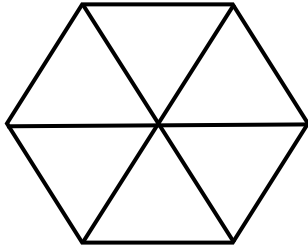


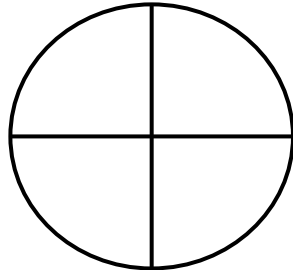
Shade the parts of the figures to match the fraction.

1.



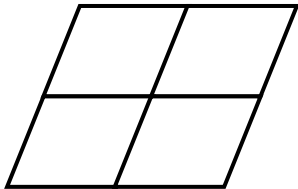
$$\frac{4}{6}$$

2.



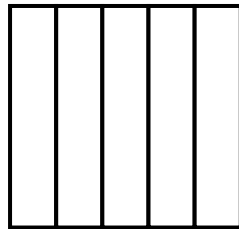
$$\frac{1}{4}$$

3.



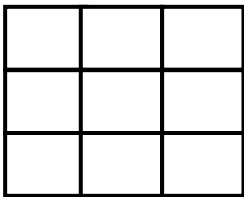
$$\frac{2}{6}$$

4.



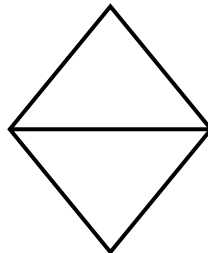
$$\frac{2}{5}$$

5.



$$\frac{6}{9}$$

6.



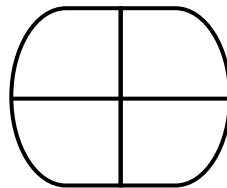
$$\frac{1}{2}$$

7.




$$\frac{3}{7}$$

8.




$$\frac{2}{4}$$

9.



$$\frac{1}{2}$$

10.



$$\frac{4}{8}$$



ANSWERS

WORKSHEET#8

- 1) shade any 4 parts of the figure out of 6
- 2) shade any 1 part of the figure out of 4
- 3) shade any 2 parts of the figure out of 6
- 4) shade any 2 parts of the figure out of 5
- 5) shade any 6 parts of the figure out of 9
- 6) shade any 1 part of the figure out of 2
- 7) shade any 3 part of the figure out of 7
- 8) shade any 2 parts of the figure out of 4
- 9) shade any 1 part of the figure out of 2
- 10) shade any 4 parts of the figure out of 8