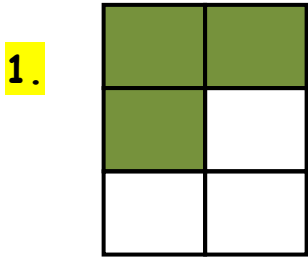
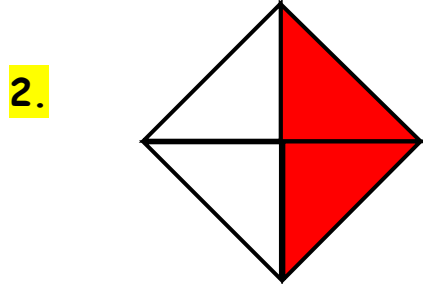


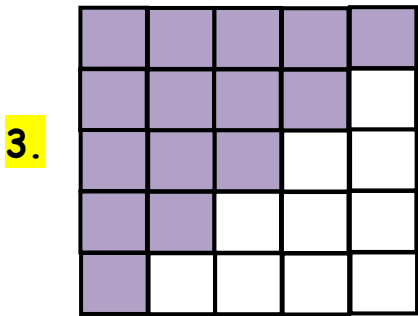
Check what fraction of the figure is shaded and circle the correct answer.



- a) $\frac{5}{6}$ b) $\frac{2}{6}$ c) $\frac{3}{6}$



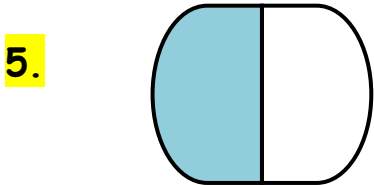
- a) $\frac{2}{4}$ b) $\frac{1}{4}$ c) $\frac{3}{4}$



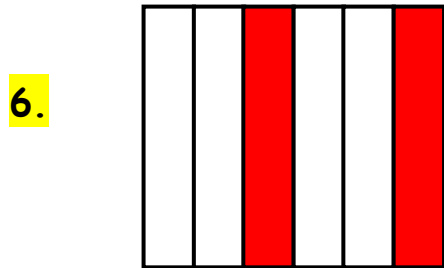
- a) $\frac{8}{25}$ b) $\frac{12}{25}$ c) $\frac{15}{25}$



- a) $\frac{2}{5}$ b) $\frac{3}{5}$ c) $\frac{5}{5}$



- a) $\frac{1}{2}$ b) $\frac{2}{2}$



- a) $\frac{5}{6}$ b) $\frac{2}{6}$ c) $\frac{3}{6}$



ANSWERS

WORKSHEET#7

1) c

2) a

3) c

4) b

5) a

6) b