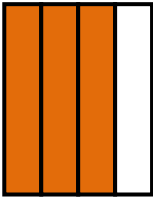
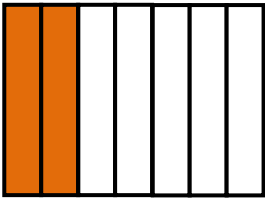


Match the figure with the correct fraction.

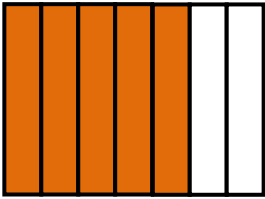
1.



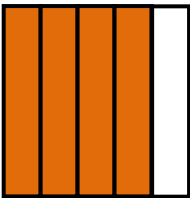
2.



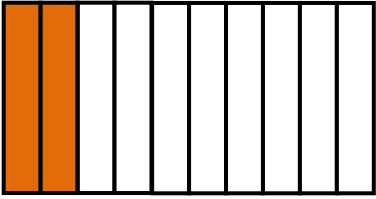
3.



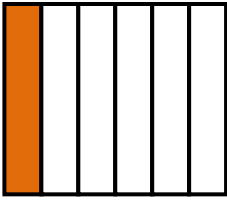
4.




5.




6.




a)




b)




c)




d)



e)



f)





ANSWERS

WORKSHEET#6

1) c

2) e

3) a

4) b

5) f

6) d